



Determine if the angle shown is 'less', 'more' or 'equal' to 90°.

Ex)



1)



2)



Answers

Ex. more

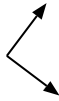
1. _____

2. _____

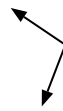
3)



4)



5)



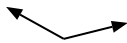
3. _____

4. _____

6)



7)



8)

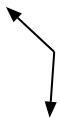


5. _____

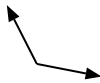
6. _____

7. _____

9)



10)



11)



8. _____

9. _____

10. _____

12)



13)



14)



11. _____

12. _____

13. _____

15)



16)



17)



14. _____

15. _____

16. _____

18)



19)



20)



17. _____

18. _____

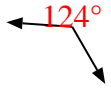
19. _____

20. _____



Determine if the angle shown is 'less', 'more' or 'equal' to 90°.

Ex)



1)



2)



Answers

Ex. more

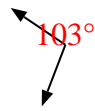
3)



4)



5)



1. equal

2. equal

3. less

4. equal

5. more

6)



7)



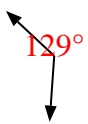
8)



6. equal

7. more

9)



10)



11)



8. equal

9. more

10. more

11. less

12)



13)



14)



12. less

13. less

14. less

15)



16)



17)



15. equal

16. less

17. more

18)



19)



20)



18. equal

19. equal

20. less